

CANDIDATE  
NAME

--

CENTRE  
NUMBER

--	--	--	--	--

CANDIDATE  
NUMBER

--	--	--	--

**MATHEMATICS**

**9709/53**

Paper 5 Mechanics 2 (M2)

**October/November 2018**

**1 hour 15 minutes**

Candidates answer on the Question Paper.

Additional Materials: List of Formulae (MF9)

**READ THESE INSTRUCTIONS FIRST**

Write your Centre number, candidate number and name in the spaces at the top of this page.

Write in dark blue or black pen.

You may use an HB pencil for any diagrams or graphs.

Do not use staples, paper clips, glue or correction fluid.

**DO NOT WRITE IN ANY BARCODES.**

Answer **all** the questions in the space provided. If additional space is required, you should use the lined page at the end of this booklet. The question number(s) must be clearly shown.

Give non-exact numerical answers correct to 3 significant figures, or 1 decimal place in the case of angles in degrees, unless a different level of accuracy is specified in the question.

Where a numerical value for the acceleration due to gravity is needed, use  $10 \text{ m s}^{-2}$ .

The use of an electronic calculator is expected, where appropriate.

You are reminded of the need for clear presentation in your answers.

At the end of the examination, fasten all your work securely together.

The number of marks is given in brackets [ ] at the end of each question or part question.

The total number of marks for this paper is 50.

This document consists of **15** printed pages and **1** blank page.

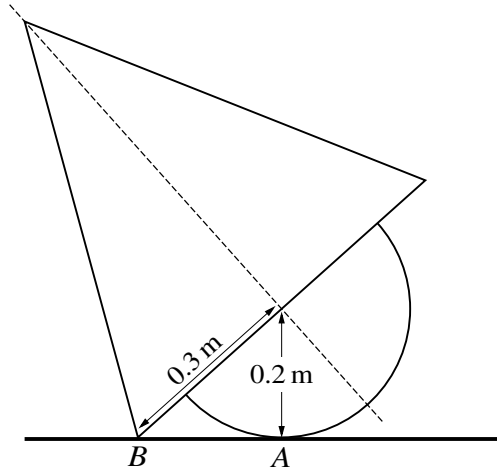




1 A small ball *B* is projected with speed  $30 \text{ m s}^{-1}$  at an angle of  $60^\circ$  to the horizontal from a point on horizontal ground. Find the time after projection when the speed of *B* is  $25 \text{ m s}^{-1}$  for the second time. [4]

.....  
.....  
.....  
.....  
.....  
.....  
.....  
.....  
.....  
.....  
.....  
.....  
.....  
.....  
.....  
.....  
.....  
.....  
.....  
.....  
.....  
.....  
.....  
.....  
.....

2



A uniform object is made by attaching the base of a solid hemisphere to the base of a solid cone so that the object has an axis of symmetry. The base of the cone has radius 0.3 m, and the hemisphere has radius 0.2 m. The object is placed on a horizontal plane with a point A on the curved surface of the hemisphere and a point B on the circumference of the cone in contact with the plane (see diagram).

- (i) Given that the object is on the point of toppling about B, find the distance of the centre of mass of the object from the base of the cone. [3]

.....

.....

.....

.....

.....

.....

.....

.....

.....

.....

.....

.....

.....

.....

.....

.....

.....

.....

.....

- (ii) Given instead that the object is on the point of toppling about  $A$ , calculate the height of the cone. [3]

[The volume of a cone is  $\frac{1}{3}\pi r^2 h$ . The volume of a hemisphere is  $\frac{2}{3}\pi r^3$ .]

.....  
.....  
.....  
.....  
.....  
.....  
.....  
.....  
.....  
.....  
.....  
.....  
.....  
.....  
.....  
.....  
.....  
.....  
.....  
.....  
.....  
.....  
.....  
.....

3 A particle  $P$  of mass  $0.4\text{ kg}$  is attached to a fixed point  $O$  by a light elastic string of natural length  $0.5\text{ m}$  and modulus of elasticity  $20\text{ N}$ . The particle  $P$  is released from rest at  $O$ .

(i) Find the greatest speed of  $P$  in the subsequent motion. [4]

.....

.....

.....

.....

.....

.....

.....

.....

.....

.....

.....

.....

.....

.....

.....

.....

.....

.....

.....

.....

.....

.....

.....

.....

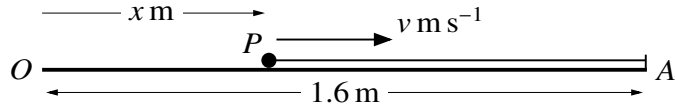
.....

.....

.....



4



A particle  $P$  of mass  $0.5 \text{ kg}$  is projected along a smooth horizontal surface towards a fixed point  $A$ . Initially  $P$  is at a point  $O$  on the surface, and after projection,  $P$  has a displacement from  $O$  of  $x \text{ m}$  and velocity  $v \text{ m s}^{-1}$ . The particle  $P$  is connected to  $A$  by a light elastic string of natural length  $0.8 \text{ m}$  and modulus of elasticity  $16 \text{ N}$ . The distance  $OA$  is  $1.6 \text{ m}$  (see diagram). The motion of  $P$  is resisted by a force of magnitude  $24x^2 \text{ N}$ .

- (i) Show that  $v \frac{dv}{dx} = 32 - 40x - 48x^2$  while  $P$  is in motion and the string is stretched. [3]

.....

.....

.....

.....

.....

.....

.....

.....

The maximum value of  $v$  is  $4.5$ .

- (ii) Find the initial value of  $v$ . [5]

.....

.....

.....

.....

.....

.....

.....

.....

.....

.....











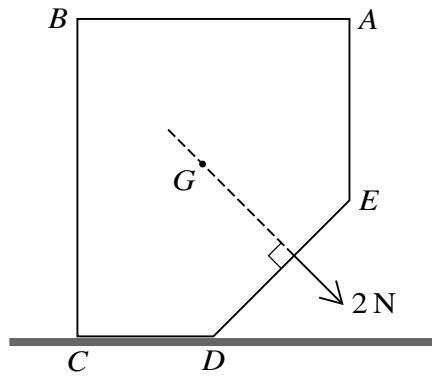


Fig. 2

The prism is placed with  $CD$  on a rough horizontal surface. A force of magnitude  $2\text{ N}$  acting in the plane of the cross-section is applied to the prism. The line of action of the force passes through  $G$  and is perpendicular to  $DE$  (see Fig. 2). The prism is on the point of toppling about the edge through  $D$ .

(ii) Calculate the weight of the prism. [3]

.....

.....

.....

.....

.....

.....

.....

.....

.....

.....

.....

.....

.....

.....

.....

.....

.....

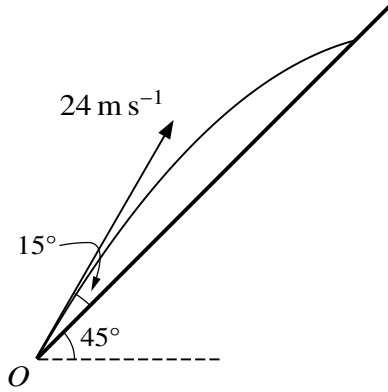
.....

.....

.....

.....

.....



A small object is projected with speed  $24 \text{ m s}^{-1}$  from a point  $O$  at the foot of a plane inclined at  $45^\circ$  to the horizontal. The angle of projection of the object is  $15^\circ$  above a line of greatest slope of the plane (see diagram). At time  $t \text{ s}$  after projection, the horizontal and vertically upwards displacements of the object from  $O$  are  $x \text{ m}$  and  $y \text{ m}$  respectively.

- (i) Express  $x$  and  $y$  in terms of  $t$ , and hence find the value of  $t$  for the instant when the object strikes the plane. [4]

.....

.....

.....

.....

.....

.....

.....

.....

.....

.....

.....

.....

.....

.....

.....

.....

.....

.....

.....

.....

.....

.....

.....



**Additional Page**

If you use the following lined page to complete the answer(s) to any question(s), the question number(s) must be clearly shown.

.....  
.....  
.....  
.....  
.....  
.....  
.....  
.....  
.....  
.....  
.....  
.....  
.....  
.....  
.....  
.....  
.....  
.....  
.....  
.....  
.....  
.....  
.....  
.....  
.....  
.....  
.....  
.....  
.....  
.....  
.....  
.....  
.....

Permission to reproduce items where third-party owned material protected by copyright is included has been sought and cleared where possible. Every reasonable effort has been made by the publisher (UCLES) to trace copyright holders, but if any items requiring clearance have unwittingly been included, the publisher will be pleased to make amends at the earliest possible opportunity.

To avoid the issue of disclosure of answer-related information to candidates, all copyright acknowledgements are reproduced online in the Cambridge International Examinations Copyright Acknowledgements Booklet. This is produced for each series of examinations and is freely available to download at [www.cie.org.uk](http://www.cie.org.uk) after the live examination series.

Cambridge International Examinations is part of the Cambridge Assessment Group. Cambridge Assessment is the brand name of University of Cambridge Local Examinations Syndicate (UCLES), which is itself a department of the University of Cambridge.